

Name: _____

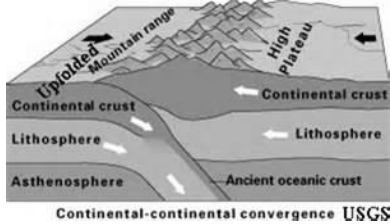
Date: _____

Period: _____

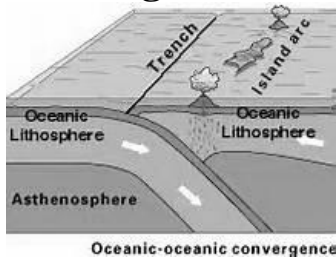
Plate Boundaries

Go to <https://www.youtube.com/watch?v=ifke1GsjNNO>. Use information there to add notes to this sheet.

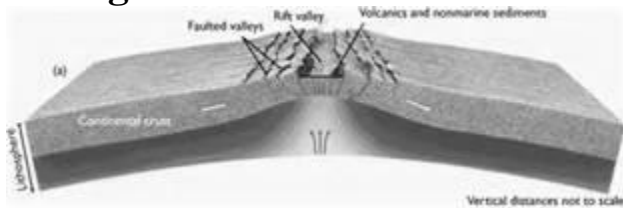
Convergent: Continent to Continent



Convergent: Ocean to Continent – Subduction



Divergent:



Transform

